


Wir lernen das Einmaleins

Blütenblätter




Plus: _____ Mal: _____

Bananen




Plus: _____ Mal: _____

Zucker-
stangen




Plus: _____ Mal: _____

Ballons



Plus: _____ Mal: _____

Kerzen




Plus: _____ Mal: _____

Möhren



Plus: _____ Mal: _____

Palmen-
blätter



Plus: _____ Mal: _____

Male nun selbst Bilder und schreibe die Aufgaben:

Plus: _____ Mal: _____

Plus: _____ Mal: _____

Plus: _____ Mal: _____

Wir lernen das Einmaleins

Plus	Mal
$2+2+2+2+2+2 = \underline{\quad}$	$6 \cdot 2 =$ <hr/>
$4+4+4+4+4+4+4+4 = \underline{\quad}$	<hr/>
$10+10+10+10 = \underline{\quad}$	<hr/>
$1+1+1+1+1+1+1+1+1+1 = \underline{\quad}$	<hr/>
$2+2 = \underline{\quad}$	<hr/>
$5+5+5+5+5+5+5+5 = \underline{\quad}$	<hr/>
$3+3+3+3+3+3+3 = \underline{\quad}$	<hr/>
$1+1+1+1 = \underline{\quad}$	<hr/>
$2+2+2+2+2+2+2+2+2 = \underline{\quad}$	<hr/>
$10+10+10+10+10 = \underline{\quad}$	<hr/>
$3+3+3+3 = \underline{\quad}$	<hr/>
$10+10+10+10+10+10+10 = \underline{\quad}$	<hr/>
$4+4+4+4 = \underline{\quad}$	<hr/>
$2+2+2+2+2 = \underline{\quad}$	<hr/>
$1+1+1+1+1+1+1 = \underline{\quad}$	<hr/>
$3 = \underline{\quad}$	<hr/>
$5+5 = \underline{\quad}$	<hr/>
$4+4+4+4+4+4+4 = \underline{\quad}$	<hr/>
$10+10+10+10+10+10 = \underline{\quad}$	<hr/>
$5+5+5+5+5+5+5+5+5 = \underline{\quad}$	<hr/>
$1+1+1+1+1+1+1+1 = \underline{\quad}$	<hr/>
$3+3+3 = \underline{\quad}$	<hr/>
$5+5+5+5+5+5 = \underline{\quad}$	<hr/>
$4+4+4+4+4+4+4+4+4+4 = \underline{\quad}$	<hr/>

Wir lernen das Einmaleins

Mal	Plus
$10 \cdot 2 = \underline{\quad}$	$2+2+2+2+2+2+2+2+2+2 = \underline{\quad}$
$2 \cdot 3 = \underline{\quad}$	<hr/>
$8 \cdot 4 = \underline{\quad}$	<hr/>
$3 \cdot 10 = \underline{\quad}$	<hr/>
$6 \cdot 3 = \underline{\quad}$	<hr/>
$9 \cdot 1 = \underline{\quad}$	<hr/>
$5 \cdot 5 = \underline{\quad}$	<hr/>
$7 \cdot 2 = \underline{\quad}$	<hr/>
$5 \cdot 4 = \underline{\quad}$	<hr/>
$10 \cdot 10 = \underline{\quad}$	<hr/>
$6 \cdot 1 = \underline{\quad}$	<hr/>
$4 \cdot 5 = \underline{\quad}$	<hr/>
$8 \cdot 3 = \underline{\quad}$	<hr/>
$3 \cdot 5 = \underline{\quad}$	<hr/>
$4 \cdot 2 = \underline{\quad}$	<hr/>
$5 \cdot 1 = \underline{\quad}$	<hr/>
$3 \cdot 4 = \underline{\quad}$	<hr/>
$7 \cdot 5 = \underline{\quad}$	<hr/>
$8 \cdot 10 = \underline{\quad}$	<hr/>
$5 \cdot 3 = \underline{\quad}$	<hr/>
$9 \cdot 10 = \underline{\quad}$	<hr/>
$3 \cdot 1 = \underline{\quad}$	<hr/>
$6 \cdot 4 = \underline{\quad}$	<hr/>
$8 \cdot 2 = \underline{\quad}$	<hr/>