

## What's the time?

The red clock is a quarter past one.

The orange clock is half past three.

The black clock is a quarter to six.

The brown clock is a quarter past eight.

The yellow clock is a quarter to eight.



The pink clock is half past eleven.

The green clock is a quarter past eleven.


The grey clock is a quarter to eleven.

The blue clock is a quarter past seven.


The white clock is \_\_\_\_\_ .




1 \_\_\_\_\_




2 \_\_\_\_\_




3 \_\_\_\_\_



4 \_\_\_\_\_



5 \_\_\_\_\_



red black white grey blue pink orange brown green yellow